

Temasek Primary School

Semestral Assessment 2

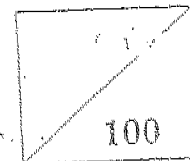
Primary One

2004

SP1A2

MATHEMATICS

Name: _____ ()



Class: Primary 1 _____

Date : 2 November 2004

Parent's Signature: _____

Total Time: 1 hour 30 minutes

DO NOT OPEN THIS BOOKLET UNTIL YOU ARE TOLD TO DO SO.

FOLLOW ALL INSTRUCTIONS CAREFULLY.

Name: _____

Class: Pr. 1 _____

Section A : (20 x 2 marks)

Choose the correct answer for each question and write its number in the brackets provided.

1. How many presents are there altogether?



- (1) twelve (2) fourteen
(3) twenty (4) twenty-four ()

2. 3 tens 8 ones is the same as _____.

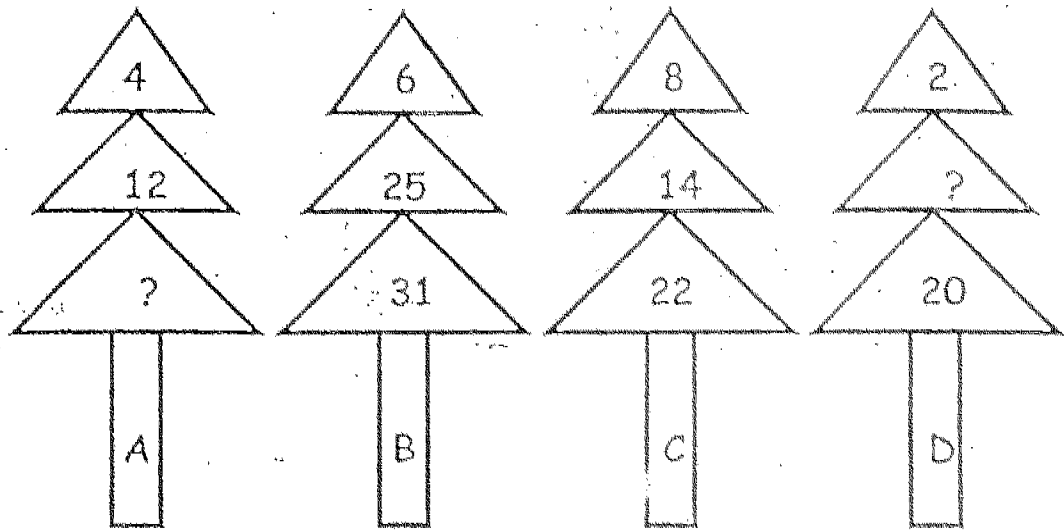
- (1) 11 (2) 38
(3) 83 (4) 381 ()

3. 41 is between _____ and 42.

- (1) 38 (2) 43
(3) 44 (4) 51

()

4. What are the missing numbers in A and D?



- (1) 8 and 22 (2) 16 and 18
(3) 17 and 19 (4) 18 and 13 ()

5. Which of these sets of numbers is arranged in order from the greatest to the smallest?

- (1) 42, 44, 46, 48
(2) 29, 31, 33, 35
(3) 95, 85, 75, 65
(4) 36, 34, 33, 35 ()

6. Jane has 56 stamps. I have 20 stamps more than she. How many stamps do I have?

- (1) 30 (2) 36
(3) 58 (4) 76 ()

7. $23 + 28 = \underline{\hspace{2cm}}$

(1) 40

(2) 41

(3) 50

(4) 51

()

8. Mrs Bala made 30 big and small doughnuts. 7 of them were big. How many doughnuts were small?

(1) 23

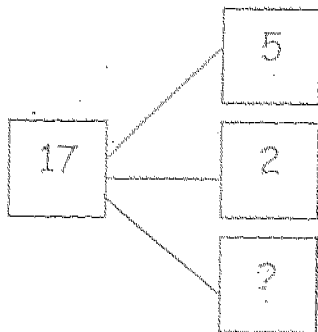
(2) 24

(3) 36

(4) 37

()

9.



What is the missing number?

(1) 10

(2) 24

(3) 3

(4) 7

()

10. _____ is greater than 68 but smaller than 90.

(1) 38

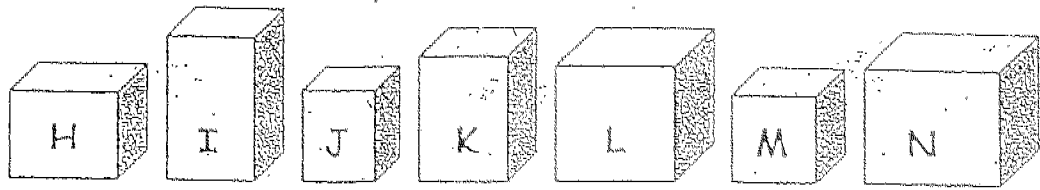
(2) 67

(3) 88

(4) 91

()

11.

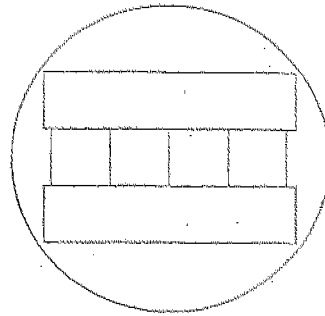


Box _____ is the 2nd box from the left.

- (1) H
- (2) I
- (3) L
- (4) M

(-)

12.



Rectangle, triangle, square and circle are names of shapes. Which shape is not drawn in the figure above?

- (1) rectangle
- (2) triangle
- (3) square
- (4) circle

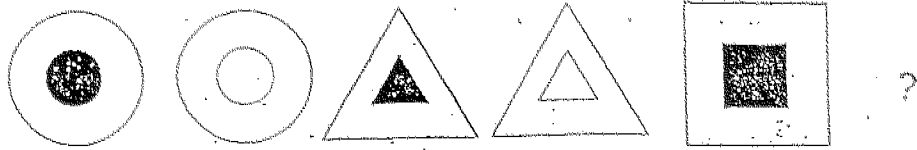
(-)

13. I can exchange _____ ten-cent coins for 2 twenty-cent coins.

- (1) 5
- (2) 2
- (3) 40
- (4) 4

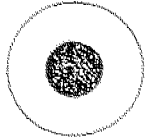
(-)

14.

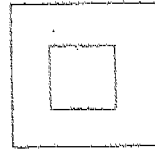


Which pattern comes next?

(1)



(2)




(3)




(4)



15.



1  = 1 unit.

Raju is _____ units tall.

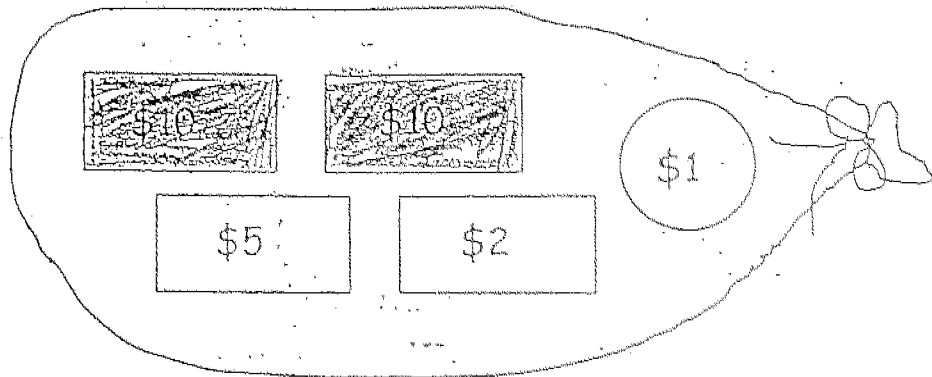
(1) 8

(2) 7

(3) 6

(4) 5

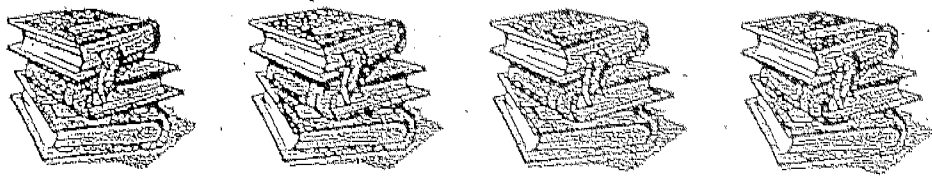
16. How much money is in the bag?



- (1) \$27
- (2) \$28
- (3) \$31
- (4) \$37

()

17.

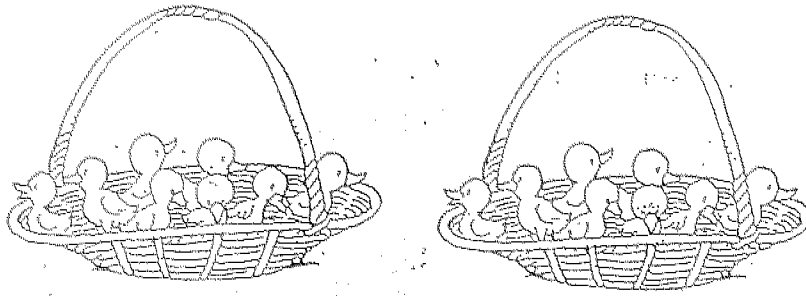


Which of these statements does not tell you about the picture?

- (1) 4 groups of 3
- (2) $4 + 4 + 4 + 4$
- (3) 4 threes
- (4) 4×3

()

18.



Betty has 2 baskets.

She puts 8 ducklings in each basket.

How many ducklings are there altogether?

(1) 16

(2) 10

(3) 6

(4) 4

()

19. Daniel has 18 ice-cream sticks.

He uses 3 sticks to form a triangle.

How many such triangles can he form altogether?



(1) 18

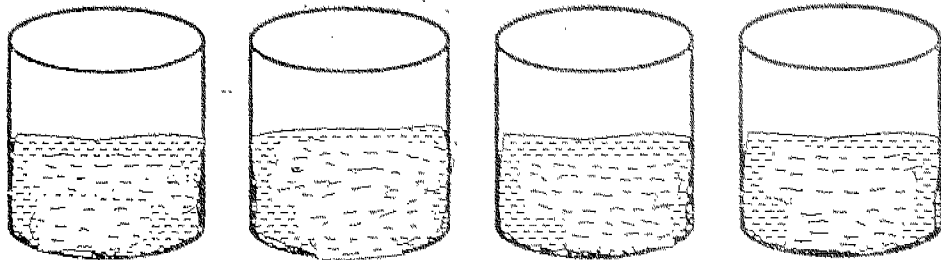

(2) 15

(3) 5

(4) 6

()

20. Ah Meng bought 20 guppies.
He wanted to put them equally into 4 jars.
How many guppies should he put in each jar?



- (1) 24
- (3) 5

- (2) 16
- (4) 4

()

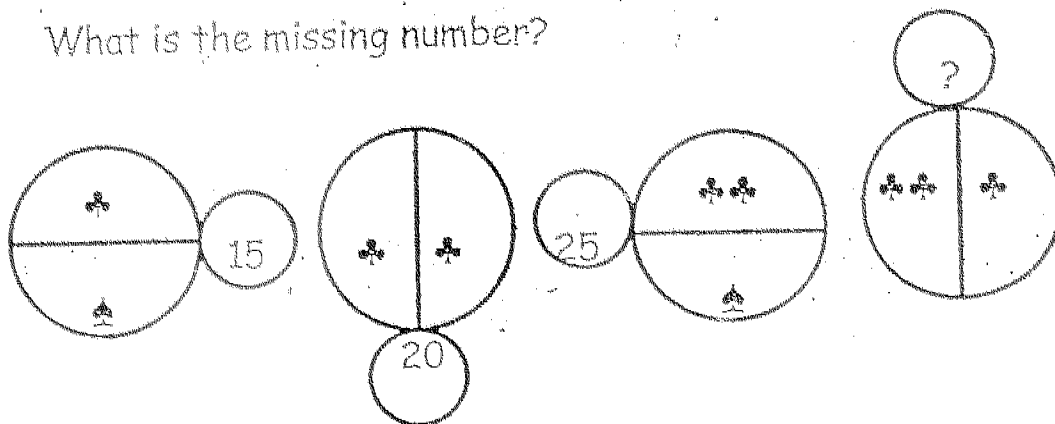
Section B: (20 X 2 marks)

Fill in each box with the correct answer.

21. The number just before 86 is


22. 99 is 1 less than

23. What is the missing number?




The missing number is

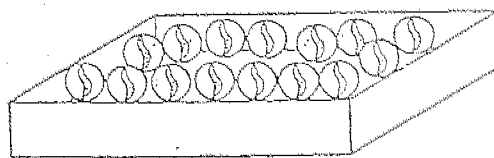
24. Write the missing numbers in the pattern.



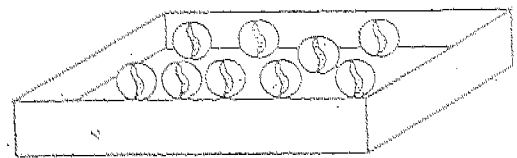
25. Arrange these numbers in order. Begin with the greatest.



26. How many more marbles are there in Box A than Box B?



Box A



Box B

There are more marbles in Box A.

27. Subtract 8 from 72. The answer is

28. Which of these number sentences has the smallest answer?
Circle it.

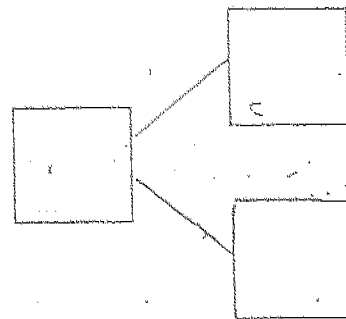

$20 + 6$

$12 + 9$

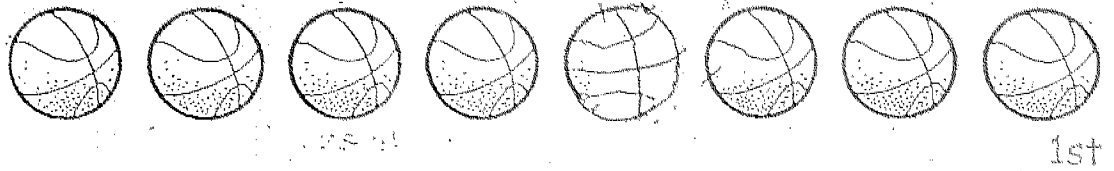
$33 - 6$

$23 - 4$

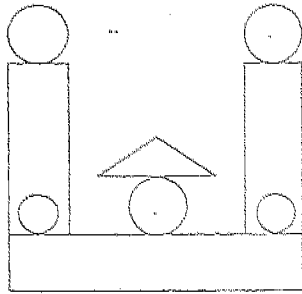
29. Look at the toys in the picture.
Fill in the numbers to form the correct number bond.



30. Cross out the ball that is between the 3rd and the 5th ball.

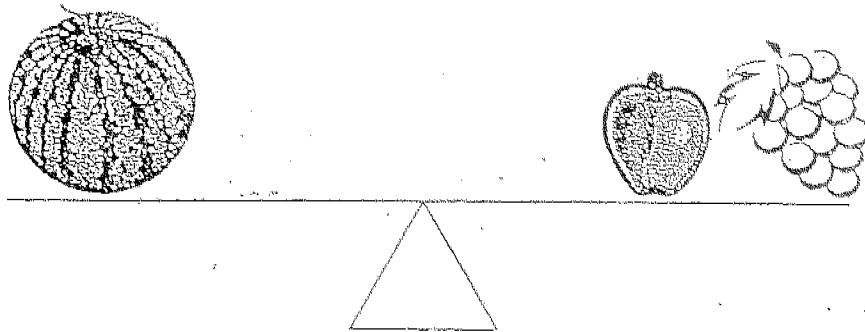


31. Look at the figure below.



There are circles more than rectangles.

32.

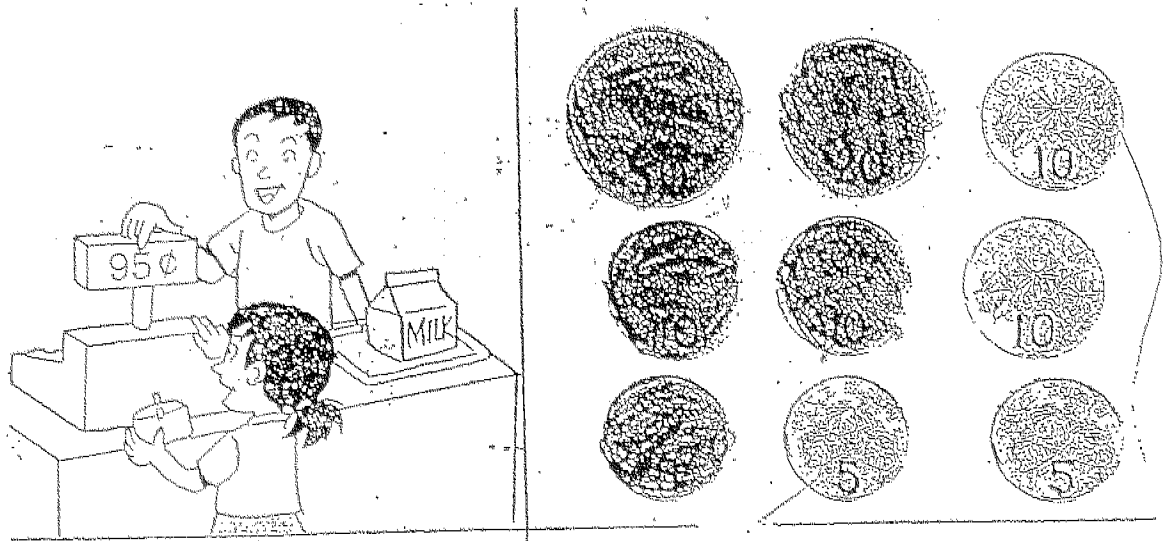


The mass of the grapes is 7 units.

The mass of the apple is 3 units.

The mass of the watermelon is units.

33. Colour the set of coins needed to pay for the packet of milk.




34. The graph below shows the types of food that different children like.

Food that children like	
Chicken Wing	△ △ △ △ △ △ △ △ △
Noodle Soup	△ △
Sandwich	△ △ △ △ △
Burger	△ △ △ △ △ △ △ △ △ △
Each △ stands for 1 child.	

a) Most of the children like best.

b) more children like sandwich than noodle soup.

35. The graph below shows the number of toy cars each boy has.



Ravi has 3 fewer toy cars than Wei Jie.


Draw circles on the picture graph to show the number of toy cars Ravi has.


36. Mei Mei has 13 dolls.


Minah has 3 fewer dolls than Mei Mei.

Kim has 4 more dolls than Minah.


Who has the greatest number of dolls?




37. Draw  to show 5 groups of 4.



38. Mother bought some cherries.
She wants to put an equal number of cherries on each cake.
Draw the correct number of cherries on each cake.




39. Ring these buttons in groups of 3.



There are groups altogether.

40.



Jack is having a picnic at the beach.

He is eating his lunch at _____.(time)

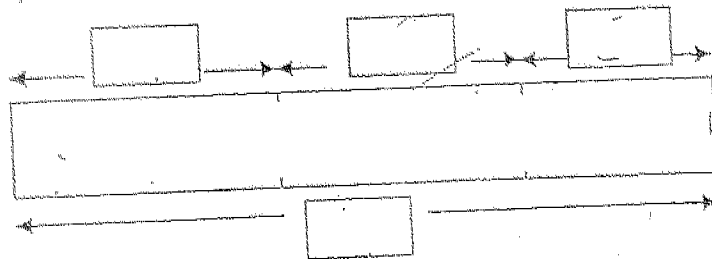
Section C: (5 x 4 marks)

Read the questions carefully and write the statements clearly.

41. After Mother had spent \$26 on fish, eggs and vegetables, she had \$8 left in her purse.
How much money did she have at first?

She had _____

42. In a basket, there are 7 apples and 5 papayas.
Yanzi puts 6 watermelons into the basket.
How many fruits are there in the basket now?




There are _____

43. Harry has 58 stickers. If Harry has 13 more stickers than Jill, how many stickers does Jill have?

Jill has _____

44. I bought 3 bunches of flowers.
There were 5 flowers in each bunch.
How many flowers were there altogether?




There were _____

45. There were 8 children at the party.
Grandma gave 2 balloons to each child.
How many balloons did Grandma give away?

2

She gave away _____

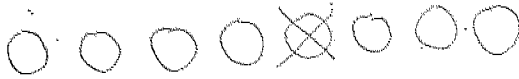



End of Paper
Check your work carefully.



TEMASEK PRIMARY SCHOOL
 SEMESTRAL ASSESSMENT 2 - 2004
 PRIMARY ONE MATHEMATICS

SAW

- 1) 4 26) 6
- 2) 2 27) 64
- 3) 1 28) $23 - 4$
- 4) 2 29) 2
- 5) 3 6
- 6) 4 4
- 7) 4 30) 
- 8) 1 31) 2
- 9) 1 32) 10
- 10) 3 33) Colour 50¢ 20¢ 10¢ 10¢ 5¢
- 11) 2 34) a) Burger
- 12) 2 b) 3
- 13) 4 35) Draw 8 circles
- 14) 2 36) Kim
- 15) 3 37) 
- 16) 2
- 17) 2
- 18) 1 38) Draw 7 cherries on each box.
- 19) 4 39) Circle 3 buttons
- 20) 3 40) half past 11
- 21) 85 41) $\$ 26 + \$ 8 = \$ 34$ \$ 34 at first
- 22) 100 42) $7 + 5 + 6 = 18$ 18 fruits in the basket
- 23) 30 43) $58 - 13 = 45$ 45 stickers
- 24) 73 75 44) $3 \times 5 = 15$ 15 flowers altogether
- 25) 33 45) $8 \times 2 = 16$ 16 balloons